

Book For
Central Warehousing Corporation



CWC Asistant Reasoning Sample Paper



Visit our websites:

www.Couponlal.com

www.Myexamportal.com

www.Examlal.com

www.Joblal.com

www.joinexam.in

www.examy.com

(1) Statements: Some ants are parrots. All the parrots are apples.

Conclusions:

I. All the apples are parrots.

II. Some ants are apples.

[A] Only (1) conclusion follows

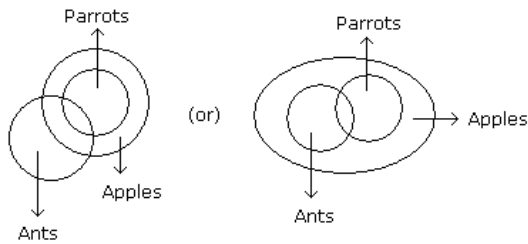
[B] Only (2) conclusion follows

[C] Either (1) or (2) follows

[D] Neither (1) nor (2) follows

[E] Both (1) and (2) follow

Answer : [B]



Explanation: Only (2) follow.

www.myexamportal.com | www.couponlal.com | www.examlal.com | www.joblal.com | www.examy.com

(2) Statements: All the windows are doors. No door is a wall.

Conclusions:

I. Some windows are walls.

II. No wall is a door.

[A] Only (1) conclusion follows

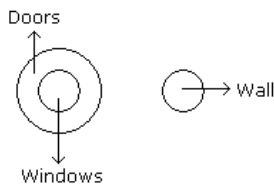
[B] Only (2) conclusion follows

[C] Either (1) or (2) follows

[D] Neither (1) nor (2) follows

[E] Both (1) and (2) follow

Answer : [B]



Explanation: Only (2) follows.

www.myexamportal.com | www.couponlal.com | www.examlal.com | www.joblal.com | www.examy.com

(3) Statements: All buildings are chalks. No chalk is toffee.

Conclusions:

I. No building is toffee

II. All chalks are buildings.

[A] Only (1) conclusion follows

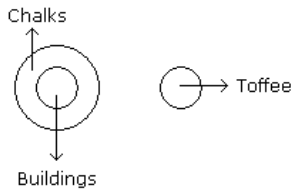
[B] Only (2) conclusion follows

[C] Either (1) or (2) follows

[D] Neither (1) nor (2) follows

[E] Both (1) and (2) follow

Answer : [A]



Explanation: Only (1) follows.

www.myexamportal.com | www.couponlal.com | www.examlal.com | www.joblal.com | www.examy.com

(4) Statements: Some tables are T.V. Some T.V. are radios.

Conclusions:

- I. Some tables are radios.
- II. Some radios are tables.
- III. All the radios are T.V.
- IV. All the T.V. are tables.

[A] Only (2) and (4)

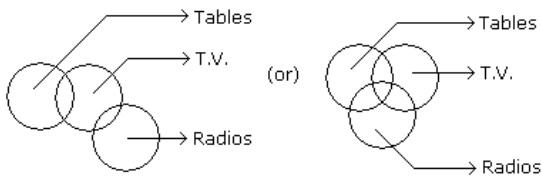
[B] Only (1) and (3)

[C] Only (4)

[D] Only (1) and (4)

[E] None of the four.

Answer : [E]



Explanation: None of the four follows.

www.myexamportal.com | www.couponlal.com | www.examlal.com | www.joblal.com | www.examy.com

(5) Statements: All green are blue. All blue are white.

Conclusions:

- I. Some blue are green.
- II. Some white are green.
- III. Some green are not white.
- IV. All white are blue.

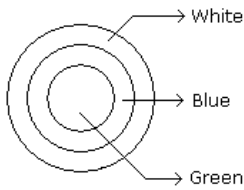
[A] Only (1) and (2)

[B] Only (1) and (3)

[C] Only (1) and (4)

[D] Only (2) and (4)

Answer : [A]



Explanation: Only (1) and (2) follows.

www.myexamportal.com | www.couponlal.com | www.examlal.com | www.joblal.com | www.examy.com

(6) Ice : Coldness :: Earth : ?

- [A] Weight
- [B] Jungle
- [C] Gravitation
- [D] Sea

Answer : [C]

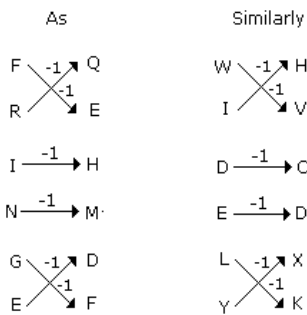
Explanation: As effect of Ice is coldness similarly the effect of Earth is gravitation.

www.myexamportal.com | www.couponlal.com | www.examlal.com | www.joblal.com | www.examy.com

(7) ? : QEHMDF :: WIDELY : HVCDXK

- [A] FRINGE
- [B] STRING
- [C] FRANCE
- [D] DEMAND

Answer : [A]



Explanation:

www.myexamportal.com | www.couponlal.com | www.examlal.com | www.joblal.com | www.examy.com

(8) Train : Track

- [A] Water : Boat
- [B] Bullet : Barrel
- [C] Idea : Brain
- [D] Fame : Television

Answer : [B]

Explanation: As Train is guided by the track similarly Bullet is guided by the barrel.

www.myexamportal.com | www.couponlal.com | www.examlal.com | www.joblal.com | www.examy.com

(9) Thermometer : Temperature

- [A] Millimeter : Scale

[B] Length : Breadth

[C] Solar Energy : Sun

[D] Cardiograph : Heart rate

Answer : [D]

Explanation: As temperature is measured from a thermometer in the same way heart rate is measured with cardiograph.

www.myexamportal.com | www.couponlal.com | www.examlal.com | www.joblal.com | www.examy.com

(10) 'College' is related to 'Teachers' in the same way as 'Hospital' is related to:

[A] Doctors

[B] Patients

[C] Medicine

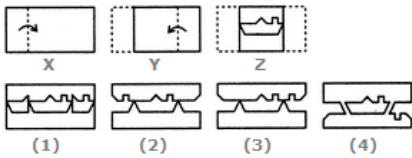
[D] Beds

Answer : [A]

Explanation: As teaching is done by 'Teachers' in the 'College' similarly treatment is done by 'Doctors' in the 'Hospital'.

www.myexamportal.com | www.couponlal.com | www.examlal.com | www.joblal.com | www.examy.com

(11) Choose a figure which would most closely resemble the unfolded form of Figure (Z).



[A] 1

[B] 2

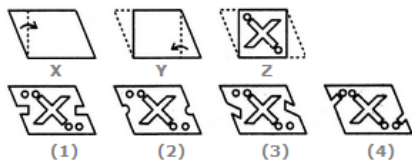
[C] 3

[D] 4

Answer : [C]

www.myexamportal.com | www.couponlal.com | www.examlal.com | www.joblal.com | www.examy.com

(12) Choose a figure which would most closely resemble the unfolded form of Figure (Z).



[A] 1

[B] 2

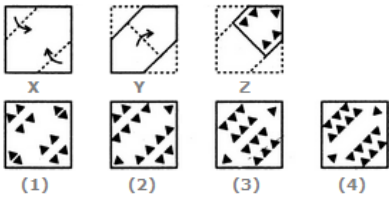
[C] 3

[D] 4

Answer : [D]

www.myexamportal.com | www.couponlal.com | www.examlal.com | www.joblal.com | www.examy.com

(13) Choose a figure which would most closely resemble the unfolded form of Figure (Z).

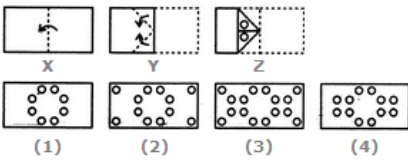


- [A] 1
- [B] 2
- [C] 3
- [D] 4

Answer : [B]

www.myexamportal.com | www.couponlal.com | www.examlal.com | www.joblal.com | www.examy.com

(14) Choose a figure which would most closely resemble the unfolded form of Figure (Z).

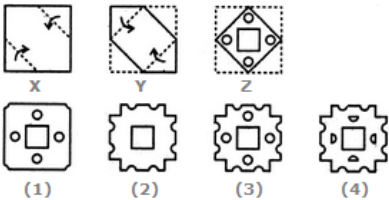


- [A] 1
- [B] 2
- [C] 3
- [D] 4

Answer : [A]

www.myexamportal.com | www.couponlal.com | www.examlal.com | www.joblal.com | www.examy.com

(15) Choose a figure which would most closely resemble the unfolded form of Figure (Z).



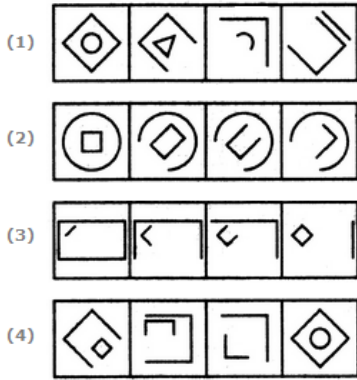
- [A] 1
- [B] 2
- [C] 3
- [D] 4

Answer : [C]

www.myexamportal.com | www.couponlal.com | www.examlal.com | www.joblal.com | www.examy.com

(16) Choose the set of figures which follows the given rule.

Rule: Closed figures gradually become open and open figures gradually become closed.



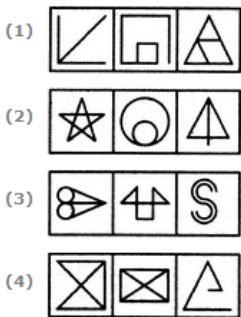
- [A] 1
- [B] 2
- [C] 3
- [D] 4

Answer : [C]

www.myexamportal.com | www.couponlal.com | www.examlal.com | www.joblal.com | www.examy.com

(17) Choose the set of figures which follows the given rule.

Rule: Any figure can be traced by a single unbroken line without retracting.



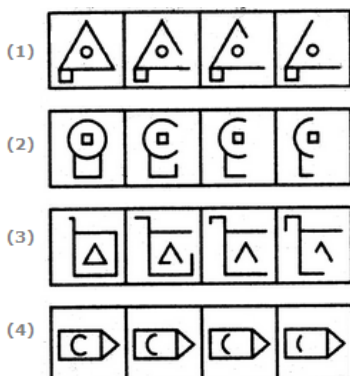
- [A] 1
- [B] 2
- [C] 3
- [D] 4

Answer : [B]

www.myexamportal.com | www.couponlal.com | www.examlal.com | www.joblal.com | www.examy.com

(18) Choose the set of figures which follows the given rule.

Rule: Closed figures become more and more open and open figures become more and more closed.



- [A] 1

[B] 2

[C] 3

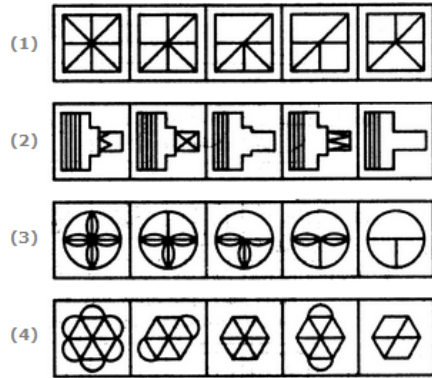
[D] 4

Answer : [C]

www.myexamportal.com | www.couponlal.com | www.examlal.com | www.joblal.com | www.examy.com

(19) Choose the set of figures which follows the given rule.

Rule: The series becomes simpler as it proceeds.



[A] 1

[B] 2

[C] 3

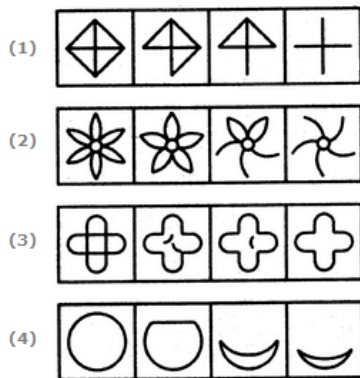
[D] 4

Answer : [C]

www.myexamportal.com | www.couponlal.com | www.examlal.com | www.joblal.com | www.examy.com

(20) Choose the set of figures which follows the given rule.

Rule: Closed figure becomes more and more open.



[A] 1

[B] 2

[C] 3

[D] 4

Answer : [A]

www.myexamportal.com | www.couponlal.com | www.examlal.com | www.joblal.com | www.examy.com
