

Book For
Orissa Power Transmission Corporation Limited



OPTCL Reasoning Sample Paper 2016 PDF Download



Visit our websites:

www.Couponlal.com

www.Myexamportal.com

www.Examlal.com

| www.Joblal.com

| www.joinexam.in

| www.examy.com

(1) Arrange the words given below in a meaningful sequence.

1. Rainbow 2. Rain 3. Sun
4. Happy 5. Child

[A] 4, 2, 3, 5, 1

[B] 2, 3, 1, 5, 4

[C] 4, 5, 1, 2, 3

[D] 2, 1, 4, 5, 3

Answer : [B]

Explanation:

The correct order is :

Rain Sun Rainbow Child Happy
2 3 1 5 4

www.myexamportal.com | www.couponlal.com | www.examlal.com | www.joblal.com | www.examy.com

(2) Arrange the words given below in a meaningful sequence.

1. Heel 2. Shoulder 3. Skull 4. Neck 5. Knee
6. Chest 7. Thigh 8. Stomach 9. Face 10. Hand

[A] 3, 4, 7, 9, 2, 5, 8, 10, 6, 1

[B] 3, 9, 4, 2, 10, 6, 8, 7, 5, 1

[C] 2, 4, 7, 10, 1, 5, 8, 9, 6, 3

[D] 4, 7, 10, 1, 9, 6, 2, 5, 8, 3

Answer : [B]

Explanation:

The correct order is :

Skull Face Neck Shoulder Hand Chest Stomach Thigh Knee Heel
3 9 4 2 10 6 8 7 5 1

www.myexamportal.com | www.couponlal.com | www.examlal.com | www.joblal.com | www.examy.com

(3) Arrange the words given below in a meaningful sequence.

1. Table 2. Tree 3. Wood 4. Seed 5. Plant

[A] 1, 2, 3, 4, 5

[B] 1, 3, 2, 4, 5

[C] 4, 5, 2, 3, 1

[D] 4, 5, 3, 2, 1

Answer : [C]

www.myexamportal.com | www.couponlal.com | www.examlal.com | www.joblal.com | www.examy.com

(4) Arrange the words given below in a meaningful sequence.

1. Income 2. Status 3. Education 4. Well-being 5. Job

[A] 1, 2, 5, 3, 4

[B] 1, 3, 2, 5, 4

[C] 3, 1, 5, 2, 4

[D] 3, 5, 1, 2, 4

Answer : [D]

www.myexamportal.com | www.couponlal.com | www.examlal.com | www.joblal.com | www.examy.com

(5) Arrange the words given below in a meaningful sequence.

1. Never 2. Sometimes 3. Generally 4. Seldom 5. Always

[A] 5, 2, 1, 3, 4

[B] 5, 2, 4, 3, 1

[C] 5, 3, 2, 1, 4

[D] 5, 3, 2, 4, 1

Answer : [D]

www.myexamportal.com | www.couponlal.com | www.examlal.com | www.joblal.com | www.examy.com

(6) Arrange the words given below in a meaningful sequence.

1. Index 2. Contents 3. Title 4. Chapters 5. Introduction

[A] 2, 3, 4, 5, 1

[B] 3, 2, 5, 1, 4

[C] 3, 2, 5, 4, 1

[D] 5, 1, 4, 2, 3

Answer : [C]

www.myexamportal.com | www.couponlal.com | www.examlal.com | www.joblal.com | www.examy.com

(7) Arrange the words given below in a meaningful sequence.

1. Patient 2. Diagnosis 3. Bill 4. Doctor 5. Treatment

[A] 1, 4, 2, 3, 5

[B] 1, 4, 3, 2, 5

[C] 1, 4, 2, 5, 3

[D] 4, 1, 2, 3, 5

Answer : [C]

www.myexamportal.com | www.couponlal.com | www.examlal.com | www.joblal.com | www.examy.com

(8) Arrange the words given below in a meaningful sequence.

1. Sentence 2. Chapter 3. Letter 4. Book 5. Word 6. Paragraph

[A] 4, 2, 1, 6, 5, 3

[B] 4, 2, 6, 1, 5, 3

[C] 4, 6, 1, 2, 3, 5

[D] 4, 6, 2, 5, 1, 3

Answer : [B]

www.myexamportal.com | www.couponlal.com | www.examlal.com | www.joblal.com | www.examy.com

(9) Choose the odd one out.

[A] ACHI

[B] DFKL

[C] MNST

[D] OQVW

[E] PRWX

Answer : [C]

Explanation:

In all other groups, the first two letters are alternate, third and fourth letters are consecutive and there is a gap of four letters between the second and third letters.

(10) Choose the odd one out.

[A] APoQ

[B] DXeM

[C] SFiK

[D] OWjB

[E] CquL

Answer : [D]

Explanation:

In all other groups, the third letter is small and a vowel.

(11) Choose the odd one out.

[A] BDYW

[B] CEXZ

[C] DFYW

[D] EGXV

Answer : [B]

Explanation:

In all other groups, the first and second letters are alternate; the third and fourth letters are alternate and written in a reverse alphabetical order.

(12) Choose the odd one out.

[A] ACDF

[B] FGKL

[C] HIVW

[D] TUOP

Answer : [A]

Explanation:

In all other groups, the first and second as well as the third and fourth letters are consecutive.

(13) Choose the odd one out.

[A] FJOU

[B] EINT

[C] JNRX

[D] ADHM

Answer : [C]

Explanation:

In all other groups, the number of letters skipped between two consecutive letters increases by one from left to right.

(14) Choose the odd one out.

[A] OUQT

[B] QFSE

[C] LKNJ

[D] BSDR

[E] UCYB

Answer : [E]

Explanation:

In all other groups, first letter is moved two steps forward to obtain the third letter, the fourth and second letters are in alphabetical order.

www.myexamportal.com | www.couponlal.com | www.examlal.com | www.joblal.com | www.examy.com

(15) Choose the odd one out.

[A] AEFJ

[B] EHIL

[C] KOPT

[D] UYZD

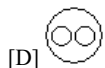
Answer : [B]

Explanation:

In all other groups, the second and fourth letters are each four steps ahead of the first and third letters respectively, while second and third letters are consecutive.

www.myexamportal.com | www.couponlal.com | www.examlal.com | www.joblal.com | www.examy.com

(16) Which of the following diagrams indicates the best relation between Travelers, Train and Bus ?

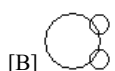


Answer : [C]

Explanation: Bus and Train are different from each other but some travelers travel by bus and some travel by train.

www.myexamportal.com | www.couponlal.com | www.examlal.com | www.joblal.com | www.examy.com

(17) Which of the following diagrams indicates the best relation between Moon, Sun and Earth ?







Answer : [C]

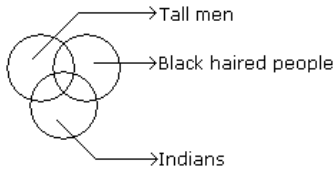
Explanation: All the three are different from each other.

www.myexamportal.com | www.couponlal.com | www.examlal.com | www.joblal.com | www.examy.com

(18) Which of the following diagrams indicates the best relation between Tall man, Black haired people and Indians ?

- [A] 
- [B] 
- [C] 
- [D] 





Answer : [A]



Explanation:

www.myexamportal.com | www.couponlal.com | www.examlal.com | www.joblal.com | www.examy.com





(19) Which of the following diagrams indicates the best relation between Teacher, Parents and Guardians ?

- [A] 
- [B] 
- [C] 
- [D] 

Answer : [B]

www.myexamportal.com | www.couponlal.com | www.examlal.com | www.joblal.com | www.examy.com

(20) Which of the following diagrams indicates the best relation between Football, Player and Field ?

- [A] 
- [B] 
- [C] 
- [D] 

Answer : [C]

Explanation: Football, Players and Field all are different.

www.myexamportal.com | www.couponlal.com | www.examlal.com | www.joblal.com | www.examy.com
