

Book For Public Works Department (PWD)



PWD Reasoning Sample Paper 2016 PDF Download



Visit our websites:

www.Couponlal.com

www.Myexamportal.com

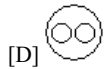
www.Examlal.com

| www.Joblal.com

| www.joinexam.in

| www.examy.com

(1) Which of the following diagrams indicates the best relation between Travelers, Train and Bus ?



Answer : [C]

Explanation: Bus and Train are different from each other but some travelers travel by bus and some travel by train.

www.myexamportal.com | www.couponlal.com | www.examlal.com | www.joblal.com | www.examy.com

(2) Which of the following diagrams indicates the best relation between Women, Mothers and Engineers ?

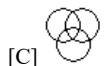
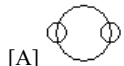


Answer : [A]

Explanation: All mothers are women and some mothers and some women may be engineers.

www.myexamportal.com | www.couponlal.com | www.examlal.com | www.joblal.com | www.examy.com

(3) Which of the following diagrams indicates the best relation between Profit, Dividend and Bonus ?

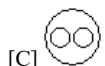


Answer : [B]

Explanation: Bonus and Dividend are different from each other. But both these are parts of profit.

www.myexamportal.com | www.couponlal.com | www.examlal.com | www.joblal.com | www.examy.com

(4) Which of the following diagrams indicates the best relation between Author, Lawyer and Singer ?

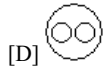
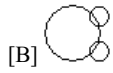


Answer : [B]

Explanation: All the three are different professions.

www.myexamportal.com | www.couponlal.com | www.examlal.com | www.joblal.com | www.examy.com

(5) Which of the following diagrams indicates the best relation between Factory, Product and Machinery ?

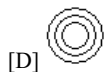
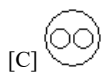


Answer : [D]

Explanation: Product and Machinery are different from each other but both are found in Factory.

www.myexamportal.com | www.couponlal.com | www.examlal.com | www.joblal.com | www.examy.com

(6) Which of the following diagrams indicates the best relation between India, Haryana and World ?

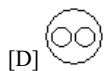
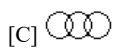


Answer : [D]

Explanation: Haryana is in India and India is in the World.

www.myexamportal.com | www.couponlal.com | www.examlal.com | www.joblal.com | www.examy.com

(7) Which of the following diagrams indicates the best relation between Earth, Sea and Sun ?



Answer : [A]

Explanation: Sea is a part of Earth while Sun is different from these two.

www.myexamportal.com | www.couponlal.com | www.examlal.com | www.joblal.com | www.examy.com

(8) Peacock : India :: Bear : ?

[A] Australia

[B] America

[C] Russia

[D] England

Answer : [C]

Explanation: As Peacock is the national bird of India, similarly Bear is the national animal of Russia.

www.myexamportal.com | www.couponlal.com | www.examlal.com | www.joblal.com | www.examy.com

(9) CUP : LIP :: BIRD : ?

[A] BUSH

[B] GRASS

[C] FOREST

[D] BEAK

Answer : [D]

Explanation: Cup is used to drink something with the help of lips. Similarly birds collect grass with the help of beak to make her nest.

www.myexamportal.com | www.couponlal.com | www.examlal.com | www.joblal.com | www.examy.com

(10) Paw : Cat :: Hoof : ?

[A] Lamb

[B] Elephant

[C] Lion

[D] Horse

Answer : [D]

Explanation: As cat has Paw similarly Horse has Hoof.

www.myexamportal.com | www.couponlal.com | www.examlal.com | www.joblal.com | www.examy.com

(11) Flow : River :: Stagnant : ?

[A] Rain

[B] Stream

[C] Pool

[D] Canal

Answer : [C]

Explanation: As Water of a River flows similarly water of Pool is Stagnant.

www.myexamportal.com | www.couponlal.com | www.examlal.com | www.joblal.com | www.examy.com

(12) Ornithologist : Bird :: Archeologist : ?

[A] Islands

[B] Mediators

[C] Archeology

[D] Aquatic

Answer : [C]

Explanation: As Ornithologist is a specialist of Birds similarly Archeologist is a specialist of Archeology.

www.myexamportal.com | www.couponlal.com | www.examlal.com | www.joblal.com | www.examy.com

(13) Carbon : Diamond :: Corundum : ?

- [A] Garnet
- [B] Ruby
- [C] Pukhraj
- [D] Pearl

Answer : [B]

Explanation: As Diamond is made of Carbon similarly Ruby is made of Corundum.

www.myexamportal.com | www.couponlal.com | www.examlal.com | www.joblal.com | www.examy.com

(14) Eye : Myopia :: Teeth : ?

- [A] Pyorrhoea
- [B] Cataract
- [C] Trachoma
- [D] Eczema

Answer : [A]

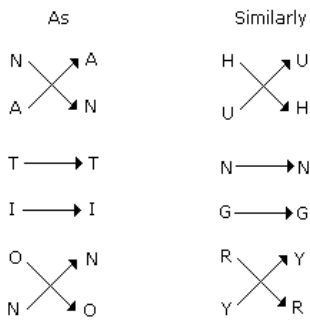
Explanation: As Myopia is disease of eye similarly pyorrhoea is a disease of teeth.

www.myexamportal.com | www.couponlal.com | www.examlal.com | www.joblal.com | www.examy.com

(15) NATION : ANTINO :: HUNGRY : ?

- [A] HNUGRY
- [B] UHNGYR
- [C] YRNGUH
- [D] UNHGYR

Answer : [B]



Explanation:

www.myexamportal.com | www.couponlal.com | www.examlal.com | www.joblal.com | www.examy.com

(16) REASON : SFBTPO :: THINK : ?

- [A] SGHMJ
- [B] UIJOL
- [C] UHNKI
- [D] UJKPM

Answer : [B]

As	Similarly
R $\xrightarrow{+1}$ S	T $\xrightarrow{+1}$ U
E $\xrightarrow{+1}$ F	H $\xrightarrow{+1}$ I
A $\xrightarrow{+1}$ B	I $\xrightarrow{+1}$ J
S $\xrightarrow{+1}$ T	N $\xrightarrow{+1}$ O
O $\xrightarrow{+1}$ P	K $\xrightarrow{+1}$ L

Explanation: N $\xrightarrow{+1}$ O

www.myexamportal.com | www.couponlal.com | www.examlal.com | www.joblal.com | www.examy.com

(17) Architect : Building :: Sculptor : ?

- [A] Museum
- [B] Stone
- [C] Chisel
- [D] Statue

Answer : [D]

Explanation: As 'Architect' makes 'Building' similarly 'Sculptor' makes 'Statue'.

www.myexamportal.com | www.couponlal.com | www.examlal.com | www.joblal.com | www.examy.com

(18) A, B, C, D and E are sitting on a bench. A is sitting next to B, C is sitting next to D, D is not sitting with E who is on the left end of the bench. C is on the second position from the right. A is to the right of B and E. A and C are sitting together. In which position A is sitting ?

- [A] Between B and D
- [B] Between B and C
- [C] Between E and D
- [D] Between C and E

Answer : [B]

Explanation:

• • • • •
E B A C D

Therefore, A is sitting in between B and C.

www.myexamportal.com | www.couponlal.com | www.examlal.com | www.joblal.com | www.examy.com

(19) There are 8 houses in a line and in each house only one boy lives with the conditions as given below:

- I. Jack is not the neighbour Siman.
- II. Harry is just next to the left of Larry.
- III. There is at least one to the left of Larry.
- IV. Paul lives in one of the two houses in the middle.
- V. Mike lives in between Paul and Larry.

If at least one lives to the right of Robert and Harry is not between Taud and Larry, then which one of the following statement is not correct ?

- [A] Robert is not at the left end.
- [B] Robert is in between Simon and Taud.
- [C] Taud is in between Paul and Jack.
- [D] There are three persons to the right of Paul.

Answer : [C]

www.myexamportal.com | www.couponlal.com | www.examlal.com | www.joblal.com | www.examy.com

(20) A, P, R, X, S and Z are sitting in a row. S and Z are in the centre. A and P are at the ends. R is sitting to the left of A. Who is to the right of P ?

[A] A

[B] X

[C] S

[D] Z

Answer : [B]

Explanation:

The seating arrangement is as follows:

• • • • • •
P X S Z R A

Therefore, right of P is X.