


Book For
Uttar Gujarat Vij Company Limited



UGVCL Reasoning Sample Paper 2016 PDF Download



Visit our websites:

www.Couponlal.com

www.Myexamportal.com

www.Examlal.com

| www.Joblal.com

| www.joinexam.in

| www.examy.com

(1) 120, 99, 80, 63, 48, ?

[A] 35

[B] 38

[C] 39

[D] 40

Answer : [A]

Explanation:

The pattern is - 21, - 19, - 17, - 15,.....

So, missing term = $48 - 13 = 35$.

www.myexamportal.com | www.couponlal.com | www.examlal.com | www.joblal.com | www.examy.com

(2) 3, 10, 101, ?

[A] 10101

[B] 10201

[C] 10202

[D] 11012

Answer : [C]

Explanation:

Each term in the series is obtained by adding 1 to the square of the preceding term.

So, missing term = $(101)^2 + 1 = 10202$.

www.myexamportal.com | www.couponlal.com | www.examlal.com | www.joblal.com | www.examy.com

(3) In the series 2, 6, 18, 54, what will be the 8th term ?

[A] 4370

[B] 4374

[C] 7443

[D] 7434

Answer : [B]

Explanation:

Clearly, $2 \times 3 = 6$, $6 \times 3 = 18$, $18 \times 3 = 54$,.....

So, the series is a G.P. in which $a = 2$, $r = 3$.

Therefore 8th term = $ar^{8-1} = ar^7 = 2 \times 3^7 = (2 \times 2187) = 4374$.

www.myexamportal.com | www.couponlal.com | www.examlal.com | www.joblal.com | www.examy.com

(4) 125, 80, 45, 20, ?

[A] 5

[B] 8

[C] 10

[D] 12

Answer : [A]

Explanation:

The pattern is - 45, - 35, - 25,

So, missing term = $20 - 15 = 5$.

www.myexamportal.com | www.couponlal.com | www.examlal.com | www.joblal.com | www.examy.com

(5) 589654237, 89654237, 8965423, 965423, ?

[A] 58965

[B] 65423

[C] 89654

[D] 96542

Answer : [D]

Explanation:

The digits are removed one by one from the beginning and the end in order alternately so as to obtain the subsequent terms of the series.

www.myexamportal.com | www.couponlal.com | www.examlal.com | www.joblal.com | www.examy.com

(6) Which term of the series 5, 10, 20, 40, is 1280?

[A] 10th

[B] 9th

[C] 8th

[D] None of these

Answer : [B]

Explanation:

Clearly, $5 \times 2 = 10$, $10 \times 2 = 20$, $20 \times 2 = 40$,.....

So, the series is a G.P. in which $a = 5$ and $r = 2$.

Let 1280 be the n th term of the series.

Then, $5 \times 2^{n-1} = 1280 \Leftrightarrow 2^{n-1} = 256 = 2^8 \Leftrightarrow n - 1 = 8 \Leftrightarrow n = 9$.

www.myexamportal.com | www.couponlal.com | www.examlal.com | www.joblal.com | www.examy.com

(7) 6, 12, 21, ?, 48

[A] 33

[B] 38

[C] 40

[D] 45

Answer : [A]

Explanation:

The pattern is $+ 6$, $+ 9$, $+ 12$, $+ 15$,

So, missing term = $21 + 12 = 33$.

www.myexamportal.com | www.couponlal.com | www.examlal.com | www.joblal.com | www.examy.com

(8) 198, 194, 185, 169, ?

[A] 92

[B] 112

[C] 136

[D] 144

Answer : [D]

Explanation:

The pattern is $- 4$, $- 9$, $- 16$,.....i.e. $- 2^2$, $- 3^2$, $- 4^2$,.....

So, missing pattern = $169 - 5^2 = 169 - 25 = 144$.

www.myexamportal.com | www.couponlal.com | www.examlal.com | www.joblal.com | www.examy.com

(9) 3, 4, 7, 7, 13, 13, 21, 22, 31, 34, ?

[A] 42

[B] 43

[C] 51

[D] 52

Answer : [B]

Explanation:

The given sequence is a combination of two series :

I. 3, 7, 13, 21, 31, ? and II. 4, 7, 13, 22, 34

The pattern in I is + 4, + 6, + 8, + 10,.....

The pattern in II is + 3, + 6, + 9, + 12,.....

So, missing term = 31 + 12 = 43.

www.myexamportal.com | www.couponlal.com | www.examlal.com | www.joblal.com | www.examy.com

(10) 2, 3, 5, 7, 11, ?, 17

[A] 12

[B] 13

[C] 14

[D] 15

Answer : [B]

Explanation:

Clearly, the given series consists of prime numbers starting from 2. So, the missing term is the prime number after 11, which is 13.

www.myexamportal.com | www.couponlal.com | www.examlal.com | www.joblal.com | www.examy.com

(11) Choose the word which is different from the rest.

[A] Cap

[B] Turban

[C] Helmet

[D] Veil

[E] Hat

Answer : [D]

Explanation:

All except Veil cover the head, while veil covers the face.

www.myexamportal.com | www.couponlal.com | www.examlal.com | www.joblal.com | www.examy.com

(12) Choose the word which is different from the rest.

[A] Kiwi

[B] Eagle

[C] Emu

[D] Ostrich

Answer : [B]

Explanation:

All except Eagle are flightless birds.

www.myexamportal.com | www.couponlal.com | www.examlal.com | www.joblal.com | www.examy.com

(13) Choose the word which is different from the rest.

[A] Curd

[B] Butter

[C] Oil

[D] Cheese

[E] Cream

Answer : [C]

Explanation:

All except Oil are products obtained from milk.

www.myexamportal.com | www.couponlal.com | www.examlal.com | www.joblal.com | www.examy.com

(14) Choose the word which is different from the rest.

[A] Oyster

[B] Clam

[C] Scallop

[D] Mussel

Answer : [C]

Explanation:

All except Scallop live in shells.

www.myexamportal.com | www.couponlal.com | www.examlal.com | www.joblal.com | www.examy.com

(15) Choose the word which is different from the rest.

[A] Kanpur

[B] Allahabad

[C] Varanasi

[D] Mathura

Answer : [D]

Explanation:

All except Mathura are cities situated on the banks of Ganga river.

www.myexamportal.com | www.couponlal.com | www.examlal.com | www.joblal.com | www.examy.com

(16) Choose the word which is different from the rest.

[A] Dagger

[B] Hammer

[C] Knife

[D] Sword

[E] Blade

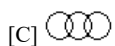
Answer : [B]

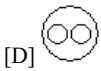
Explanation:

All except Hammer are sharp-edged and have a cutting action.

www.myexamportal.com | www.couponlal.com | www.examlal.com | www.joblal.com | www.examy.com

(17) Which of the following diagrams indicates the best relation between Travelers, Train and Bus ?



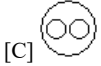


Answer : [C]

Explanation: Bus and Train are different from each other but some travelers travel by bus and some travel by train.

www.myexamportal.com | www.couponlal.com | www.examlal.com | www.joblal.com | www.examy.com

(18) Which of the following diagrams indicates the best relation between India, Haryana and World ?

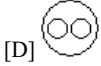


Answer : [D]

Explanation: Haryana is in India and India is in the World.

www.myexamportal.com | www.couponlal.com | www.examlal.com | www.joblal.com | www.examy.com

(19) Which of the following diagrams indicates the best relation between Earth, Sea and Sun ?

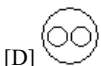


Answer : [A]

Explanation: Sea is a part of Earth while Sun is different from these two.

www.myexamportal.com | www.couponlal.com | www.examlal.com | www.joblal.com | www.examy.com

(20) Which of the following diagrams indicates the best relation between Pigeon, Bird and Dog ?



Answer : [A]

Explanation: All the pigeons are birds while dog is different from these.

www.myexamportal.com | www.couponlal.com | www.examlal.com | www.joblal.com | www.examy.com
